


Big Maths! Beat That!

CLIC Tests

Level 1



$$\begin{array}{c} \bullet \bullet \bullet \\ \bullet \end{array} + \begin{array}{c} \bullet \bullet \bullet \\ \bullet \bullet \end{array} = \bigcirc$$

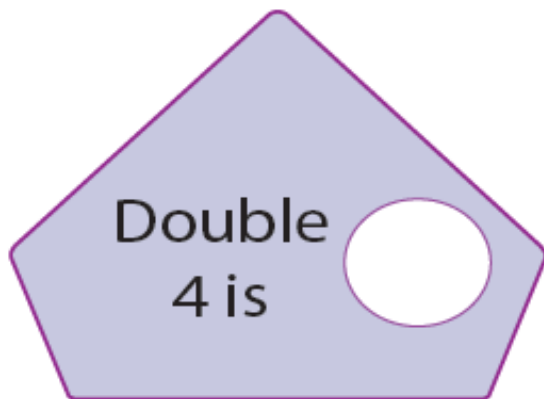
Name: _____



BIG MATHS BEAT THAT!

Write these numbers in order


| | | |
|----------------------|----------------------|----------------------|
| 8 | 2 | 4 |
| <input type="text"/> | <input type="text"/> | <input type="text"/> |



$$6 + \square = 10$$


| | |
|-----------|-----------------|
| $3 + 6 =$ | Half of 8 is... |
|-----------|-----------------|





$$\begin{array}{c} \text{Candy cane} \\ \text{Candy cane} \end{array} + \begin{array}{c} \text{Candy cane} \\ \text{Candy cane} \end{array} = \bigcirc$$

Name: _____



BIG MATHS BEAT THAT!

Write these numbers in order

| | | |
|----------------------|----------------------|----------------------|
| 5 | 2 | 3 |
| <input type="text"/> | <input type="text"/> | <input type="text"/> |

1 less than 5 is?


Double 2 is

$$3 + \square = 10$$

| | |
|-----------|------------------|
| $6 + 2 =$ | Half of 12 is... |
|-----------|------------------|

4 take away 3 is...

L1
2



$$\begin{array}{c} \text{dog} \\ \text{dog} \end{array} + \begin{array}{c} \text{dog} \\ \text{dog} \\ \text{dog} \end{array} = \bigcirc$$

Name: _____

How many hearts?

| | | |
|--|--|--|
| | | |
| | | |
| | | |

BIG MATHS BEAT THAT!

Write these numbers in order

| | | |
|----------------------|----------------------|----------------------|
| 7 | 9 | 2 |
| <input type="text"/> | <input type="text"/> | <input type="text"/> |


1 more than 4 is?

Double 5 is

$$7 + \square = 10$$

| | |
|-----------|------------------|
| $7 + 2 =$ | Half of 14 is... |
|-----------|------------------|

5 take away 1 is...



$$\begin{array}{c} \text{🐸} \text{🐸} \\ \text{🐸} \text{🐸} \end{array} + \begin{array}{c} \text{🐸} \text{🐸} \text{🐸} \\ \text{🐸} \text{🐸} \end{array} = \bigcirc$$

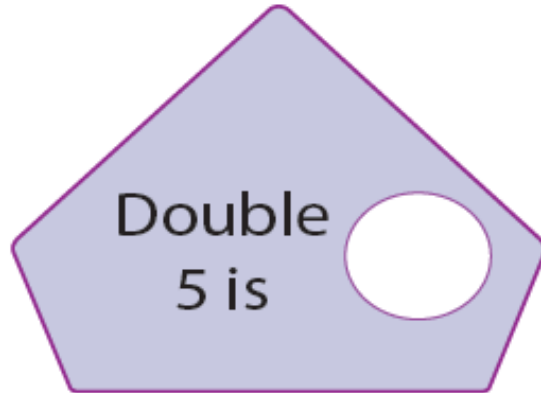
Name: _____



BIG MATHS BEAT THAT!

Write these numbers in order

| | | |
|----------------------|----------------------|----------------------|
| 6 | 4 | 8 |
| <input type="text"/> | <input type="text"/> | <input type="text"/> |




$$2 + \square = 10$$

| | |
|-----------|-----------------|
| $5 + 4 =$ | Half of 8 is... |
|-----------|-----------------|



L1
4



$$\begin{array}{c} \text{frog} \\ \text{frog} \\ \text{frog} \end{array} + \begin{array}{c} \text{frog} \\ \text{frog} \\ \text{frog} \end{array} = \bigcirc$$

Name: _____



BIG MATHS BEAT THAT!

Write these numbers in order

| | | |
|----------------------|----------------------|----------------------|
| 2 | 9 | 1 |
| <input type="text"/> | <input type="text"/> | <input type="text"/> |

1 more than 7
is?


Double
1 is

$$4 + \square = 10$$

$$6 + 3 = \bigcirc$$

Half of 14 is...

7 take away
4 is...



$$\begin{array}{c} \text{6 balloons} \\ + \text{4 balloons} \\ \hline \text{= } \bigcirc \end{array}$$

Name: _____

How many boys?

BIG MATHS BEAT THAT!

Write these numbers in order

| | | |
|----------------------|----------------------|----------------------|
| 8 | 5 | 7 |
| <input type="text"/> | <input type="text"/> | <input type="text"/> |


1 less than 8
is?

Double
4 is

$$1 + \square = 10$$

| | |
|----------------------|----------------------|
| 5 + 3 = | Half of 8 is... |
| <input type="text"/> | <input type="text"/> |

9 take away
8 is...



$$\begin{array}{c} \text{3 rockets} \\ + \text{3 rockets} \\ = \end{array} \bigcirc$$

Name: _____



BIG MATHS BEAT THAT!

Write these numbers in order

| | | |
|----------------------|----------------------|----------------------|
| 4 | 3 | 5 |
| <input type="text"/> | <input type="text"/> | <input type="text"/> |

1 more than 6
is?



Double
2 is

$$5 + \square = 10$$

$$2 + 5 = \bigcirc$$

Half of 12 is...

8 take away
3 is...



Name: _____



BIG MATHS BEAT THAT!

Write these numbers in order

| | | |
|----------------------|----------------------|----------------------|
| 7 | 1 | 6 |
| <input type="text"/> | <input type="text"/> | <input type="text"/> |

1 less than 6 is?


Double 5 is

$8 + \square = 10$

$4 + 5 =$

Half of 8 is...

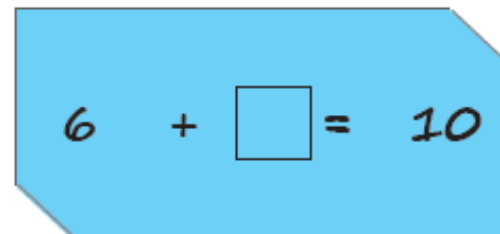
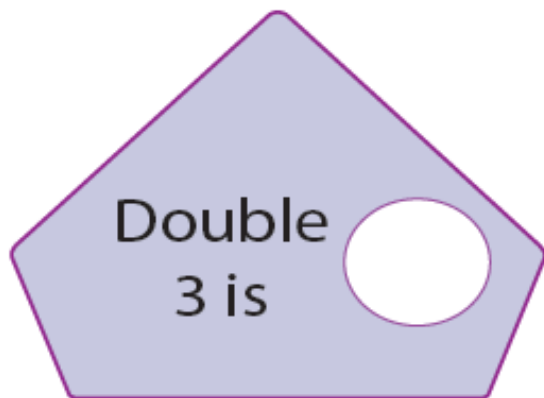
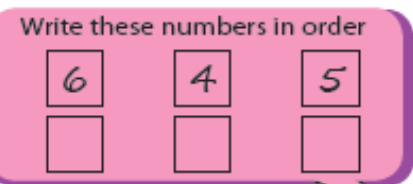
10 take away 3 is...




Name: _____




BIG MATHS BEAT THAT!





Name: _____



BIG MATHS BEAT THAT!

