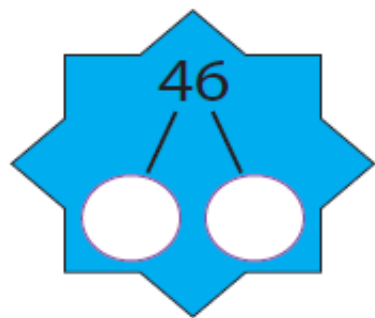


Big Maths! Beat That!

CLIC Tests

Level 2



Write out the
fact family
for:

$8 + 6 = 14$

Name: _____


$30 + 40 =$



BIG MATHS BEAT THAT!

Draw a ring around
the odd numbers

46 71 19 8

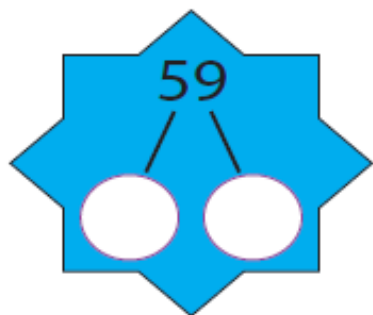


Double
9 is

$36 + \square = 40$



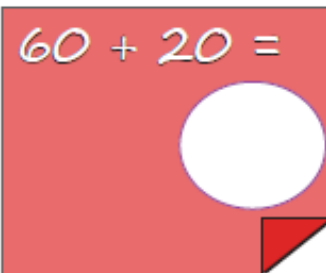
Half of 16 is...



Write out the
fact family
for:

$3 + 8 = 11$

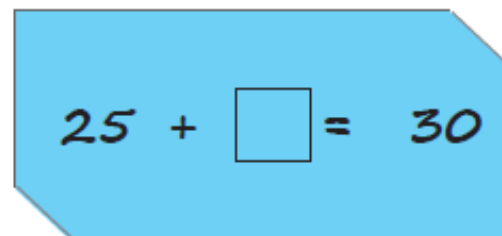
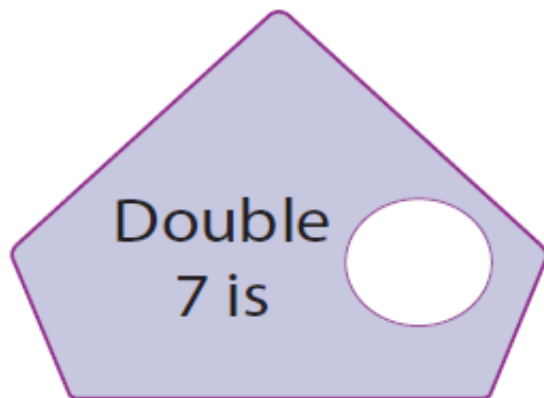
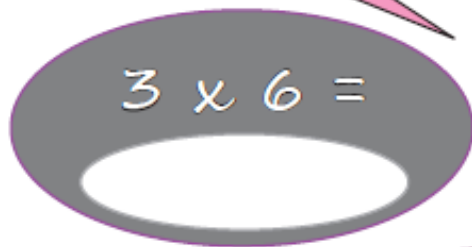
Name: _____

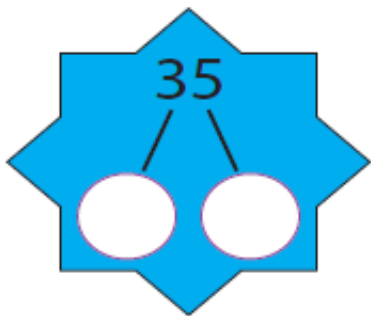


BIG MATHS BEAT THAT!

Draw a ring around
the even numbers

35 64 79 12





Write out the
fact family
for:

$5 + 7 = 12$

Name: _____

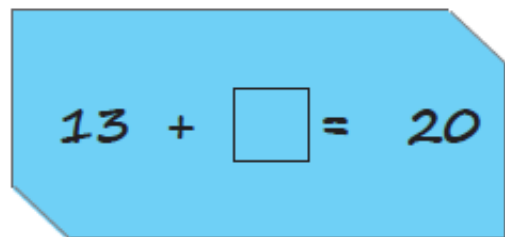
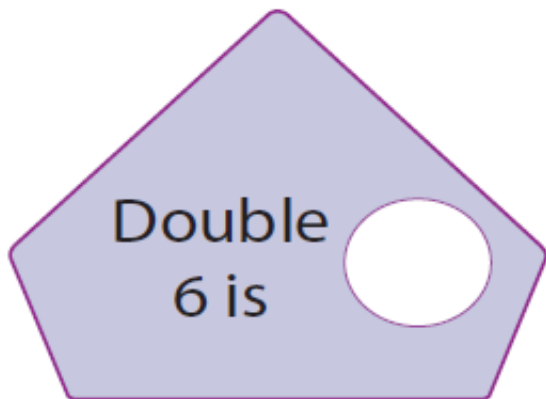
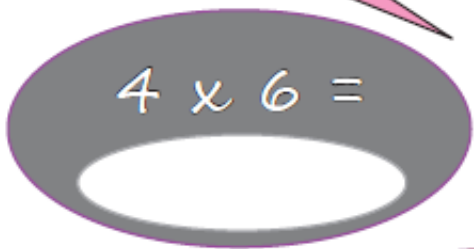
$50 + 60 =$



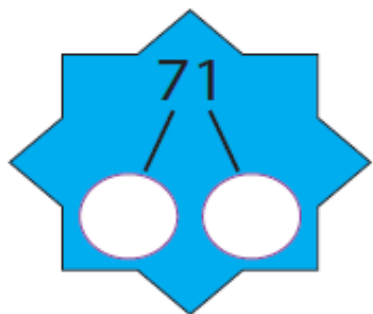
BIG MATHS BEAT THAT!

Draw a ring around
the odd numbers

10 81 7 92



L2
3



Write out the
fact family
for:

$7 + 8 = 15$

Name: _____

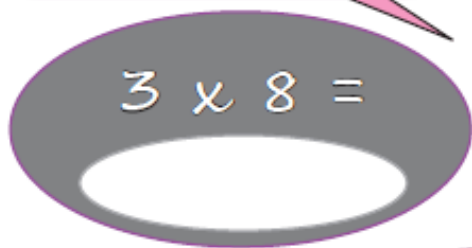
$70 + 40 =$



BIG MATHS BEAT THAT!

Draw a ring around
the even numbers

43 12 66 39



Double
9 is



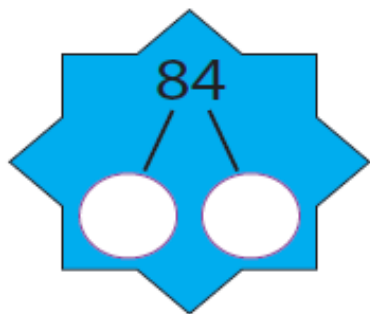
$32 + \square = 40$

Half of 12 is...



$63 + 8 =$

$71 - 5 =$



Write out the
fact family
for:

$8 + 9 = 17$

Name: _____


$40 + 40 =$



BIG MATHS BEAT THAT!

Draw a ring around
the odd numbers

97 45 68 5



Double
10 is



$74 + \square = 80$

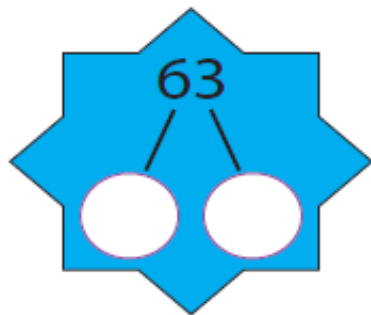
Half of 16 is...



$66 + 8 =$

$42 - 7 =$

L2
5



Write out the fact family for:

$9 + 5 = 14$

Name: _____

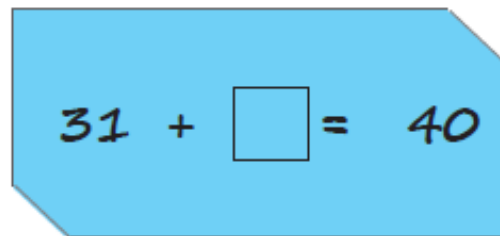
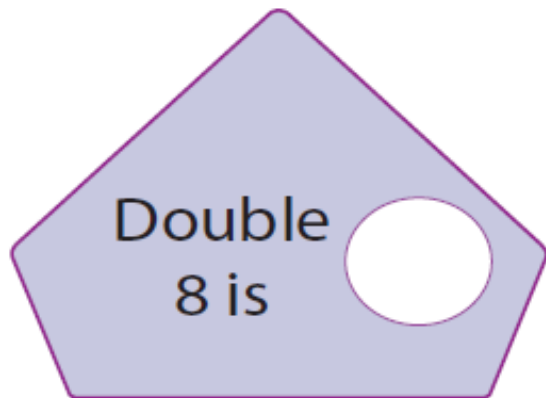
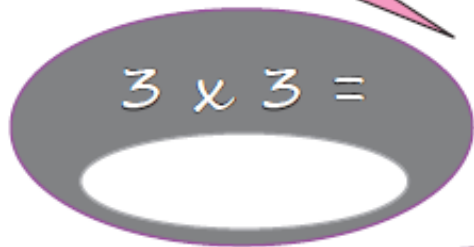
$90 + 30 =$

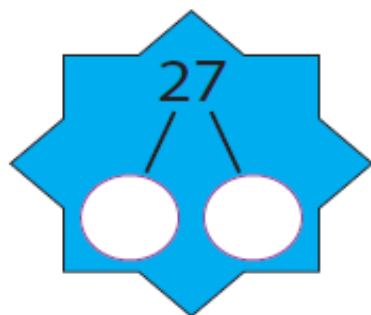


BIG MATHS BEAT THAT!

Draw a ring around the even numbers

52 33 46 70

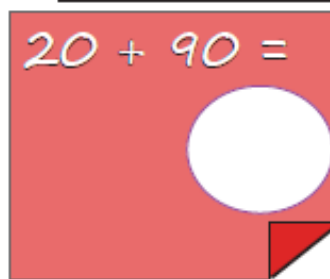




Write out the
fact family
for:

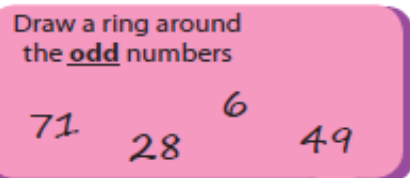
$6 + 9 = 15$

Name: _____



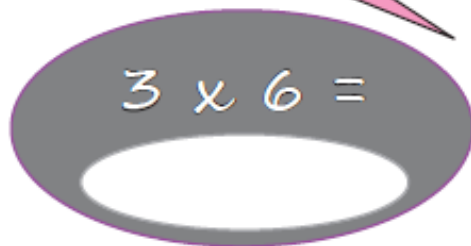
$20 + 90 =$

BIG MATHS BEAT THAT!

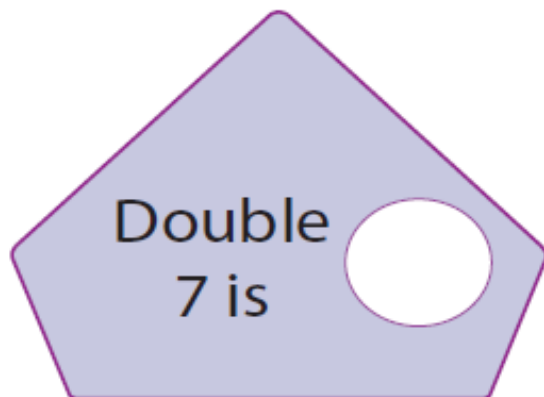


Draw a ring around
the odd numbers

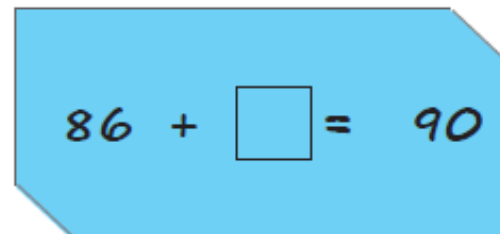
71 28 6 49



$3 \times 6 =$



Double
7 is



$86 + \square = 90$



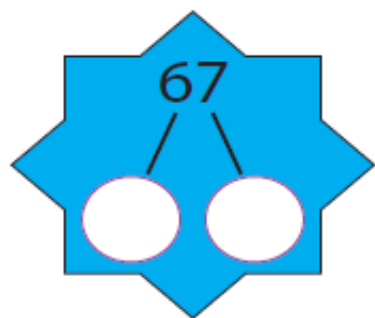
$59 + 3 =$

$64 - 7 =$



Half of 18 is...

L2
7



Write out the fact family for:

$4 + 7 = 11$

Name: _____

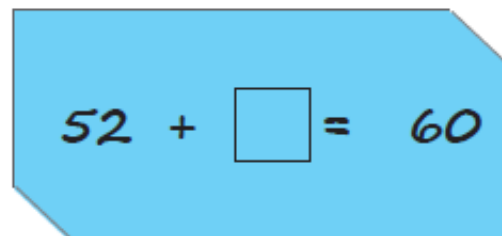
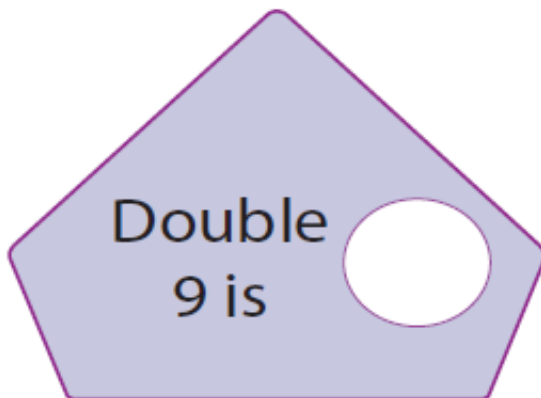
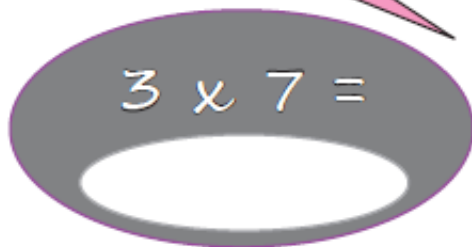
$40 + 50 =$

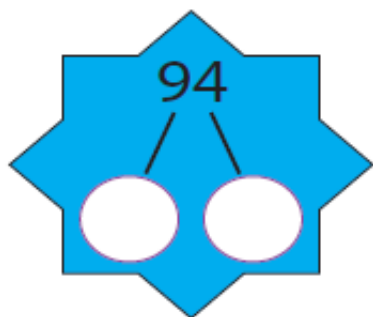


BIG MATHS BEAT THAT!

Draw a ring around the odd numbers

16 73 99 60





Write out the
fact family
for:

$5 + 8 = 13$

Name: _____

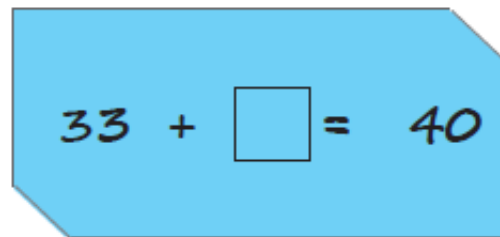
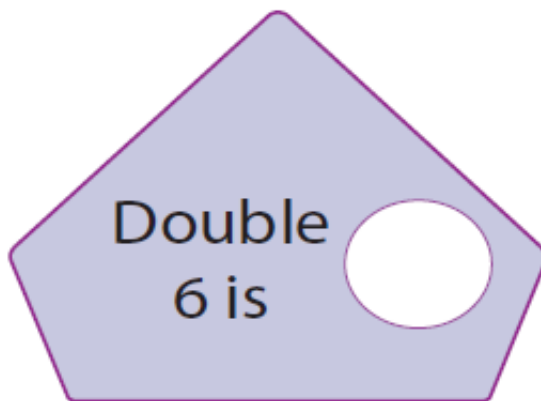
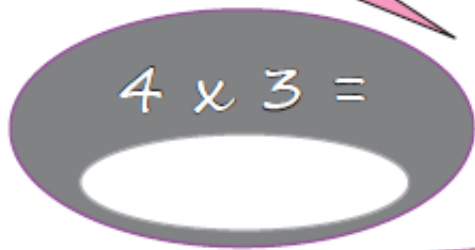
$60 + 30 =$

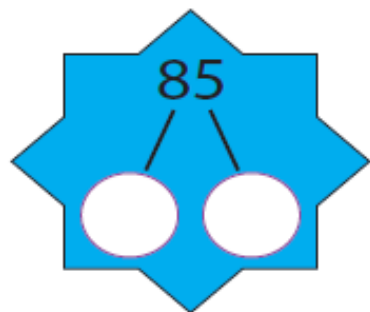


BIG MATHS BEAT THAT!

Draw a ring around
the odd numbers

55 20 7 63





Write out the fact family for:

$8 + 4 = 12$

Name: _____

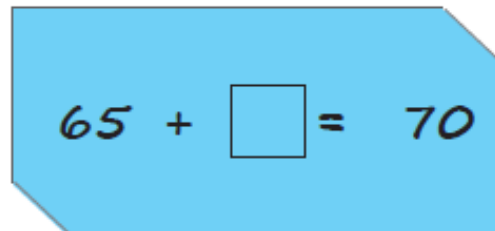
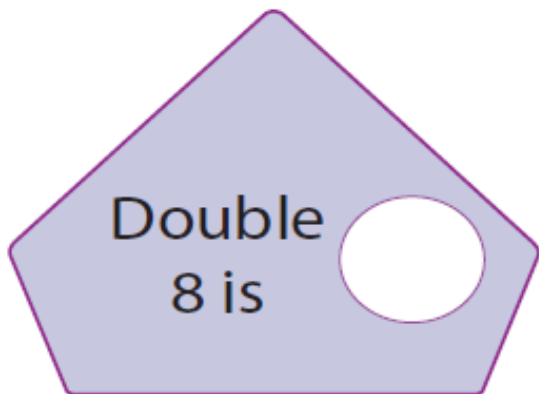

$90 + 30 =$



BIG MATHS BEAT THAT!

Draw a ring around the even numbers

24 75 40 13



L2
10